

ASSIGNMENT – 20

STD IV

MATHEMATICS

CHAPTER 12

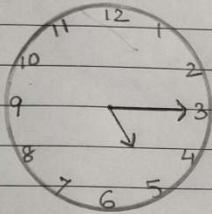
TIME

Do the following assignment in your Maths copy.

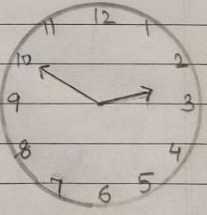
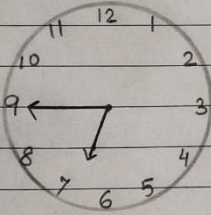
1st Page

DATE: / /
PAGE: _____

1. Write down the time shown by each of the following clocks:-




5:15
15 min. past 5




2nd Page

DATE: / /
PAGE: _____



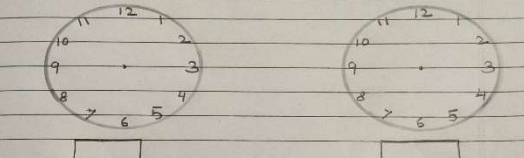
2. Draw the hands to indicate the time and also write the time in the box :-



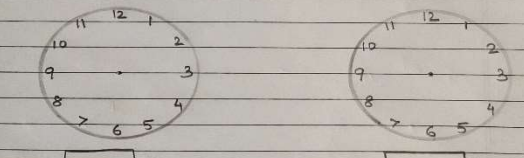
Quarter to 2 10 minutes past 7

3rd Page

DATE: / /
PAGE: _____



20 minutes to 9 Half past 11



8 o'clock 25 minutes past 5

3. Convert to 24- hour clock time:

Eg 1. 2 a.m. = 0200 hours

Eg 2. 10:15 p.m. = 1015

+ 1200

2215

= 2215 hours

a) 9:32 a.m. b) 4:15 p.m. c) 9:20 p.m.

4. Convert to 12- hour clock time:

Eg 1. 0315 hours = 3:15 a.m.

Eg 2. 1345 hours = 1345

- 1200

0145

= 1:45 p.m.

a) 1900 hours b) 0545 hours c) 2240 hours

5. Write the time using a.m. or p.m. :

Eg 1. 45 minutes after midnight = 12:45 a.m.

Eg 2. 1 hour after 12 noon = 1.00 p.m.

a) Half past 3 in the evening

b) Quarter to 4 in the morning

c) 7:15 in the morning

d) 9:20 at night